


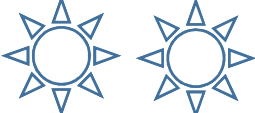


Name: _____

10 Club




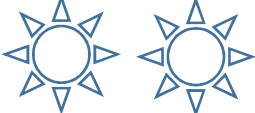
	5	
	3	
	6	
	2	

Draw a line to match the number to the objects

$2 + 6 =$	$5 + 5 =$
$1 + 4 =$	$8 + 1 =$
$7 + 3 =$	$3 + 4 =$

Name: _____

10 Club

	5	
	3	
	6	
	2	

Draw a line to match the number to the objects

$2 + 6 =$	$5 + 5 =$
$1 + 4 =$	$8 + 1 =$
$7 + 3 =$	$3 + 4 =$